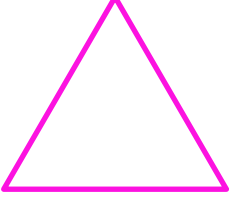


Adı : .....  
Soyadı: .....

1 . Sınıf  
Matematik

Geometrik Şekiller  
Köşe-Kenar-2


Köşelerini gösteriniz. Kaç tane köşe var?




Benim adım .....

.....tane kenarım vardır.


.....tane köşem vardır.



.....  
.....  
.....



.....  
.....  
.....



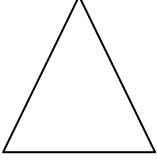


.....  
.....  
.....

Adı : .....  
Soyadı: .....


1 . Sınıf  
Matematik

Geometrik Şekiller  
Köşe-Kenar-2


İsimlerini yazınız ve boyayınız.



.....



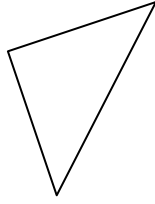
.....




.....



.....



.....



.....




.....



.....




.....




.....



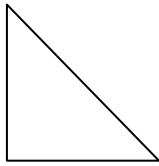
.....



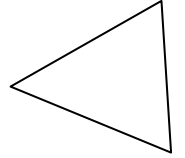
.....



.....




.....




.....



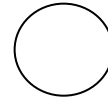
.....



.....



.....



.....



.....